

ASN International School

Winter Holiday Activity 2019-20

Class 4

Name _____

Class/Sec _____

Roll No- _____

ENGLISH

English Grammar Worksheet

Q.1 Fill in the suitable Prepositions: -

- 1) The match begins _____ Friday.
- 2) My uncle stays _____ Palam _____ Delhi.
- 3) My bag is _____ the table.
- 4) A boat is passing _____ the bridge.
- 5) The dog fell _____ the well.
- 6) There is a forecast _____ rain.
- 7) I have no taste _____ ghazal.
- 8) They sacrificed their life _____ their country.
- 9) Deepa is fond _____ landscape painting.
- 10) Miss Dolly is always busy _____ reading her books.

Q.2 Complete the given passage with appropriate prepositions: -

Once a fox saw a crow sitting a) _____ a tree. The crow had a piece b) _____ cheese in its beak. The fox hit with a plan. He praised the crow c) _____ its sweet voice. He asked it to sing a song d) _____ him. As the crow opened its beak e) _____ sing, the cheese fell down. The fox picked it f) _____ and ran away.

Q.3 Complete the given passage with appropriate conjunctions: -

Once there lived a very rich merchant. He was unhappy _____ he had a foolish son. He was sure _____ after his death, the boy would lose all his wealth. After sometime, the merchant fell ill _____ died. The boy was left alone to look after his father's wealth. He had lost all his wealth _____ he was not wise. Soon he had no money to buy

Q.4 Fill appropriate Conjunctions: -

1. We brought the food they supplied the drink.
2. She was poor she was honest.
3. We can go jogging we can stay here.
4. People liked her she was honest.
5. I will phone you I arrive.
6. _____ she has no money, she will go to market.
7. It is a problem solution has baffled even the experts.

8. It is a question nobody can answer.
9. I stayed an extra night I could see more of Mumbai.
10. you need help, just let me know.

Q.5 Pick out adjectives from the following passage: -

The golden-backed woodpecker is a very pretty bird. It is pale yellow and black in front; his sides are spotted black and white. His back is lovely golden yellow with black markings. Both, the male and female birds have black tails. But the male has a red patch on his head and also a red crest while a female has only the red chest. The wood-pecker has a long, strong, pointed bill which it uses to peck holes in the bark of trees. When a hole is made, the wood-pecker puts his long sticky tongue to get the insects inside. He particularly likes the large black ants found on the trees and on the ground. The mother bird lays three white glossy eggs in the hollow of a tree between March and August.

Q.6 Fill the correct form of adjectives: -

- a) My father went for a _____ walk yesterday. (long)
- b) The toys were packed in a _____ box. (big)
- c) Mohan's handwriting is _____ than mine. (good)
- d) Tokyo is the _____ city in the world. (costly)
- e) The chimpanzee is _____ than many other animals. (intelligent)

Q.7 Fill in the blanks with suitable Articles: -

It was _____ very hot day in _____ jungle. Tiggy and Mac were playing near _____ waterfall. They saw _____ frog. "Where are you going?" asked Mac. When _____ little frog didn't answer, _____ twins chased the frog through _____ leafy jungle. "Look!" shouted Mac. Suddenly, Tiggy tumbled to _____ stop. In front of them sat _____ whole family of funny looking frogs.

Q.8 Underline the Adverbs in the given paragraph: -

It was snowing heavily yesterday. My sister Adora had slight fever and she cried loudly in pain. She also tossed in bed restlessly. I could not find mother anywhere. I decided to get the doctor myself. I walked carefully down the road so that I did not fall in the dark. Soon I reached the doctor's clinic, but I had to wait for half an hour. When I told the doctor about Adora's fever, he gave me some medicines. Adora recovered quickly.

Q.9 Fill in the blanks with suitable Adverbs: -

- a) The girls are playing _____. (place)
- b) Does your friend live _____? (place)
- c) The peacock danced _____ in rain. (manner)
- d) Rohan was advised to work _____ by his teacher. (manner)

- e) You must try _____. (time)
- f) I will come to your house _____. (time)

Q.10 Fill suitable Pronouns: -

- a) This is my rabbit. This rabbit is _____. (Possessive)
- b) These books belong to Sonia. These are _____. (Possessive)
- c) We enjoyed _____ at the party. (reflexive)
- d) The box _____ was kept near the door has disappeared. (Relative)
- e) The cat cleaned its paws _____. (Reflexive)

Q.11 Complete the following sentences using suitable Subjects and Predicates: -

- 1) _____ are looking for a better chance
- 2) _____ are harvesting their crops.
- 3) Our teacher _____.
- 4) The Sun _____.
- 5) _____ is stitching a shirt.
- 6) Badminton _____.

Q.12 Rewrite the words to make meaningful sentences with proper punctuations and also state the kind of sentence: -

- 1) Must happy be they know to it about
- 2) Help you I may
- 3) Hidden truth you the know do
- 4) to not does she help try you
- 5) did here come why they

Q.13 Change the following sentences into questions: -

- 1) Samuel does his duty.
- 2) They tried to win the match.
- 3) They will work hard to pass the exam.
- 4) Trisha has left for the school.
- 5) He wanted to discontinue his friendship.

Q.14 Fill in the blanks using Simple Present or Present Continuous Tense: -

- 1) Peter _____ (know) about the flying saucer and now he _____ (play) with it.
- 2) I _____ (pray) to God for your golden future.
- 3) Nicky _____ (do) many mistakes in his tests, so he _____ (show) it to his teacher now.

4) Her mobile __ continuously _____ (ring). Sometimes it _____ (ring) twenty times a day.

5) Mrs. Dixit _____ (go) to her clinic every day. Look, she _____ (go) now.

Q.15 Fill in the blanks using Simple Future or Future Continuous Tense: -

1) I _____ (wait) for you when you come.

2) We _____ (help) those who really deserve our help.

3) They _____ (leave) for Mumbai tomorrow.

4) Rosy _____ (remember) me on this occasion.

5) Your students _____ (play) in the ground when you come to teach them.

Q.16 Change the following sentences as per the given tense: -

1) Ricky devoted his body and soul to the nation. (Simple Present)

2) They repeat your name as a criminal. (Simple Past)

3) All the players run around the field. (Present Continuous)

4) She felt very happy after getting this good news. (Simple Future)

5) Peter is getting a red carpet welcome after this victory. (Future Continuous)

6) We tried to complete our work on time. (Past Continuous)

- **Literature**- Learn Ch- 7, 10 (The Abraham Prize, I Don't Want To), Poem- If You Think
- **Grammar**- Revise Sentences, Nouns, Verbs, Tenses (Simple and Continuous), Pronouns, Adjectives, Articles, Adverbs, Prepositions and Conjunctions and do the given worksheet.
- **Story Book**- Revise Ch- 5,6 (Teacher's Daughter, Twin Trouble)
- **Practice Comprehension Passages and Leave Application Writing**

हिंदी शीतकालीन अवकाश का गृहकार्य

(व्याकरण का अभ्यास पत्र)

प्र01 वाक्यों में क्रिया-पद रेखांकित कीजिए तथा काल का भेद बताइए-

- (क) मोहन पत्र लिख रहा है।
- (ख) बच्चे हँस रहे हैं।
- (ग) मैं राम को पुस्तक दूँगा।
- (घ) दादीजी ने स्वादिष्ट खाना बनाया।
- (ङ) पक्षी उड़ रहे हैं।

प्र02 उचित क्रिया लगाकर रिक्त स्थान पूरे कीजिए-

- (क) मैं कल नाटक देखने। (जाना)
- (ख) हमने कविता। (सुनना)
- (ग) छोटा बच्चा। (रोना)
- (घ) स्वाति तेज़। (दौड़ना)
- (ङ) मालती ने आम। (खाना)

प्र03 उचित विशेषण लगाकर रिक्त स्थान पूरे कीजिए-

- (क) तुमने आज कपड़े पहने हैं।
- (ख) सड़क के किनारे पेड़ हैं।
- (ग) टोकरी में फल हैं।
- (घ) वह बाज़ार से दूध लाया।
- (ङ) राधा सुर में गाती है।

प्र04 वाक्यों में उचित विराम चिह्न कीजिए लगाइए -

- (क) घोड़ा तेज़ दौड़ता है
- (ख) गाड़ी धीरे धीरे चलने लगी
- (ग) वह अचानक क्यों रुक गया
- (घ) अरे रवि आज आएगा
- (ङ) साहिल राकेश और युगल ऊपर बैठे हैं

प्र05 संज्ञा छाँटकर भेद बताइए -

- (क) कश्मीर सुंदर प्रदेश है।
(ख) गाय पालतू पशु है।
(ग) कृष्ण बाँसुरी बजाते थे।
(घ) मेरा विद्यालय मयूर विहार में है।.....
(ङ) राकेश और युग खेल रहे हैं।

प्र06 वाक्यों में सर्वनाम शब्द रेखांकित कीजिए-

- (क) मैं मुसीबत में तुम्हारी सहायता अवश्य करूँगा।
(ख) तुम हमेशा उसे क्यों डाँटते हो।
(ग) आप मुझे घर जाने दो।
(घ) हम आपके साथ चलेंगे।
(ङ) उसका पेन मेरे पास है।

प्र07 वाक्यों को पढ़कर रेखांकित शब्दों के अर्थ बताइए -


- (क) सोना बहुत महँगा है।
(ख) मैंने सारे व्यंजन याद कर लिए हैं।
(ग) मैंने प्रतियागिता में भाग लिया।

Math

Math Revision Worksheet - 1

GEOMETRY

Q1. Fill ups:

- i. A  B is a _____
- ii. A _____ has 2 end points.
- iii. Diameter is _____ of the radius.
- iv. The point where two arms of an angle meet is called _____
- v. Radius = _____ \div 2
- vi. _____ is the longest chord.
- vii. Line segment passing through the centre and having its end points on the circle is called _____
- viii. Line segment joining centre to any point on the circle is called _____

Q2. Find the radii of the circle with the following diameters:

- i. 35cm
- ii. 70cm
- iii. 48m

Q3. Find the diameters of the circle with the following radii:

- i. 47m
- ii. 40m
- iii. 75cm

Math Worksheet -2

MEASUREMENT

Q1. Fill ups:

- i. 1050cm = _____ m _____ cm
- ii. $\frac{1}{2}$ kg = _____ gms
- iii. 100gms + 300gms = _____ gms
- iv. 3kg 100g = _____ g
- v. $\frac{3}{4}$ of 12 litres = _____ l
- vi. $\frac{1}{4}$ of 1m = _____ cm
- vii. 3m 10cm = _____ cm
- viii. 17l 5ml = _____ ml
- ix. $4\frac{1}{2}$ kg = _____ kg _____ g
- x. $20\frac{1}{4}$ kg = _____ g

Q2. Aditi's weight is 26kg 937g and Sugandha's weight is 28kg 570g. Find the difference in the weights.

Q3. Rani bought a 2kg 450g cake on her birthday. She and her ate 1kg 640g. How much cake was left?

Q4. The capacity of petrol tank in a car is 26l 700ml. It contains 17l 565ml of petrol. How much more petrol can be filled in the tank?

Q5. 8 mugs of soup each 250ml capacity is poured into a large vessel. What is the capacity of that vessel?

Q6. Ajay jogged 5 times around a park that had a path of length 700m. How many km did he jog?

Q7. Out of 15l 415ml of oil, a housewife used 6l 575ml. What quantity of oil was left with her?

Q8. One basket holds 9kg 750g of oranges and another holds 6kg 540g of oranges. What is the total weight of oranges in the two baskets?

Q9. A bag contains 45kg 600g of sugar and another bag contains 36kg 750g of sugar. Which bag contains more sugar? How much?

Q10. A dairy sold 54l 700ml, 83l 650ml and 75l of milk during 3 consecutive days of a week.

Math Worksheet -3

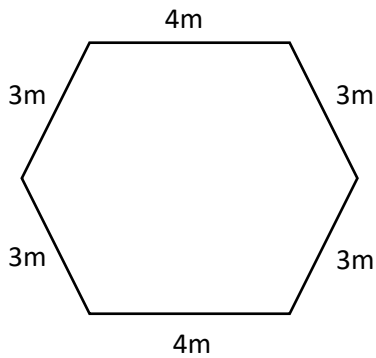
PERIMETER AND AREA

Q1. Fill ups:

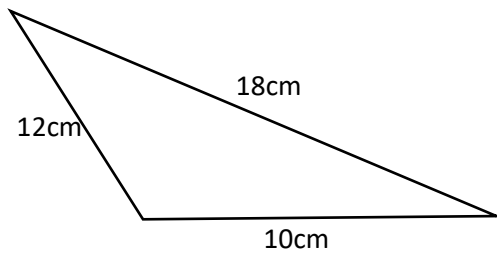
- i. The length and boundary of the figure is called the _____ of the figure.
- ii. The perimeter of a rectangle is _____
- iii. The area of a square is _____
- iv. The perimeter of a square is _____
- v. Area is measured in _____

Q2. Find the perimeter of the following:

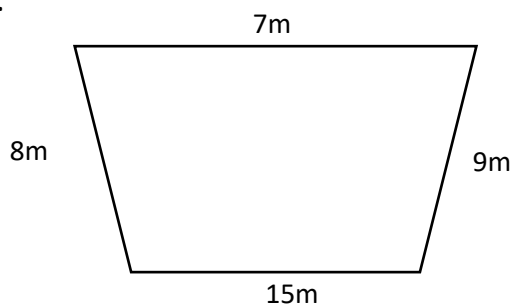
i.



ii.



iii.



Q3. A room is 5m long and 4m wide. Find its area.

Q4. Anil covered 3 rounds of a rectangular path of length 320m and width 210m. Find the total distance he ran.

Q5. Find the cost of fencing a square field of side 115m, if rate of fencing is Rs.21 per metre.

Q6. The area of a square is 16cm^2 . Find its perimeter.

Science

Revision Assignment – 1

Food, Health and My Teeth

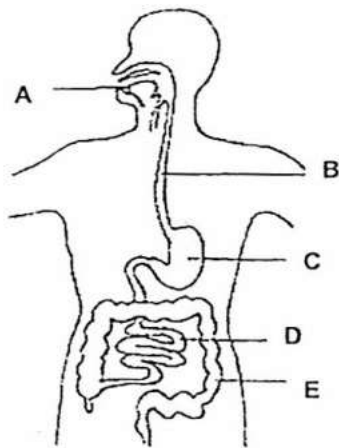
Q I. Give the Scientific term:-

1. Process of breakdown of food into simple substances _____
2. Hardest material in our body _____
3. Small living things which cause diseases _____
4. Substances in food which living beings need _____
5. Hole in the tooth _____
6. Fibre in the food which remain undigested _____

Q II. Give two examples: -

1. Energy giving nutrients _____
2. Sets of teeth _____

Q III. Label the different parts of digestive system:-



Q IV. Complete the table:-

Type of teeth	Number in both jaws	Function
Canines	-----	Tearing
-----	-----	Cutting
Pre molars	-----	-----
-----	12	-----

QV. Circle the odd one out with reasons:-

1. ghee butter pulses oil

2. drying sweetening frying pickling

QVI. Correct the following statement:-

1. Protein is a protective nutrient.

2. Crown fixes tooth firmly to the jawbone.

QVII. Distinguish between:-

Milk teeth	Permanent teeth

Q VIII. What would happen if:-

1. We do not cook the food properly.

2. We eat too many sweets and chocolates.

Q IX. Think and answer:-

Rita was chewing bread for so long and observed that the bread started tasting sweet.

1. Name the digestive juice present in our mouth.

2. State the reason of changing taste of the bread?

Q10. Mention the function along with two examples of each:-

1. Protective nutrient _____

2. Fibre _____

3. Body building nutrients _____

SST

Revision Worksheet – 1

Topic - Means of Transport

Q1 Define the following terms

Transport:

.....

Famine:

.....

Golden Quadrilateral.....

.....

Metro.....

.....

Expressways.....

.....

National Highways.....

.....

Q2 Name the following

a) The fastest means of transportation

b) The Superfast trains in India

c) The main types of transport

d) The chief mode of transport in India

e) The fastest train in India

f) Cities having metro

g) Full form of MMTS

Q3 Fill in the blanks

- A) India has thelargest railway network in the world.
- b) India has.....major ports.
- c) One of the highest roads in the world, runs from
to in
- d)The highway from Amritsar to Kolkata is called
- e) The first train in India was started infrom Mumbai to
- f) The Indian Railways is thein Asia and second largest in the
.....
- g)The first bullet train in India will run betweenand
.....

Q4 Answer in detail

- a) Why are good roads essential for a country ?
- b) How are railways useful to us?
Or
Railways are the Lifeline of people in India. Comment
- c) Why is water transport cheap?
- d) How are aero planes and helicopter useful to us?
Or
What is the importance of airways?
- e) Explain the different types of roads in India?

SST Revision Worksheet – 2

L: 20 Government

Q1 Define the following terms

Government.....
.....
.....

Judiciary
.....
.....
.....

Q2 Name the following

- a) Two levels of government in India
- b) Power of Central government
- c) Power of State government
- d) First Prime Minister of India
- e) First President of India
- f) The Central government is also called
- g) Law making body in our country
- h) Two houses of Indian Parliament
- i) Head of the country
- j) The highest court in our country

Q3 Correct the false statements

- a) President is elected for a term of six years.
- b) The chief minister is the head of the state.
- c) There are 24 courts in our country.
- d) The leader of the majority party in Lok Sabha becomes the Prime Minister of the country.

Q4 Give reason

a) Why all political parties use symbols?

.....
.....
.....

b) Why do we have two levels of governments in India?

.....
.....
.....

c) Who appoints the governor of a state?

.....
.....
.....

Q5 Answer in short

a) How many states and Union Territories are there in India?

.....

b) Who appoints the chief Justice and other judges of the Supreme Court and High Court ?

.....

c) Who elects the President of India?

.....

d) When were the first elections held in India?

.....

Q5 Answer these questions (Do on separate loose sheets)

a) Write the difference between Lok Sabha and Rajya Sabha.

b) Write the difference between Supreme Court and High Court.

c) How is the Prime Minister appointed?

d) How is a chief of a state appointed?


Computer Revision Worksheet -1



Name: _____ **CLASS IV** Section: _____ Date: _____

Q1. Fill in the Blanks:

1. Mainframe computer is large, normally the size of a _____.
2. _____ loses the data when power is switched off.
3. A computer stores data and information in its _____.
4. _____ is an example of Mobile device.
5. CPU is also called _____ and _____.
6. Speed of CPU is measured in _____ and _____.
7. RAM is also called _____ and _____.
8. Name two types of Microcomputer:



9. Complete the Table:

Analog	
	Biggest Computer
	Notebook Computer
	Calculator
Mobile Device	
Hybrid Computer	



10. A notebook computer is also called a _____.

11. Microcomputer is also called _____.

12. _____ computers are the combination of both Analog and Digital computers.

13. _____ is used when computer program is turned on. It is cleared once the machine is shut off.

14. Slots at the back of the system unit is called _____.

15. The topmost bar on the program window is _____.

Q2. Write 'T' for True and 'F' for false statements.

1. Storage devices reside inside the system unit.
2. CU stands for Central Unit.
3. Supercomputers are used in schools and offices.
4. Handheld computer is a small device that fits in your hand.
5. Mobile computers are the largest computers.
6. Desktop computers can be carried around conveniently.
7. Digital camera is a mobile device that allows users to take pictures.
8. Hard disk drive reads information stored on CDs/DVDs.

Computer Revision Worksheet -2



Q1. Fill in the Blanks:

10. The operating system developed by Microsoft Corporation is _____.
11. Starting and restarting a computer is known as _____.
12. The background image that appears on our desktop is called _____.
13. Windows 10 resizes the tiles in _____ sizes.
14. _____ screen prevents the unauthorized users from accessing our files.
15. Windows _____ feature means running two or more apps at once.
16. _____ command is used to draw a semicircle or circle in LOGO.
17. To draw a hexagon, the turtle will turn _____.
18. _____ command changes the pen color of turtle.
19. There are _____ predefined colors of LOGO wherein each color is defined by a number.
20. Scratch projects are made up of objects called _____
21. The default sprite present in the scratch is _____
22. _____ tool is used to make sprite bigger.
23. _____ block is used to leave a line behind, wherever sprite moves.
24. _____ shortcut key selects the entire text of the document.
25. The file extension of Scratch file is _____.
26. _____ app is used to perform customizing tasks in windows.
27. Set pen color to yellow for drawing a triangle _____
28. Set flood color to Orange _____.
29. Set screen color to brown _____.



Q2. Write 'T' for True and 'F' for false statements.

9. To run the program, click outside the joined-up blocks of script.
10. Green flag is used to start your main program.
11. The 'move 10 steps' block moves the cat in the direction of its face.

